

## Multiple Choice - 2 pts. each

- 1) Which of the following bonds exhibits the *greatest* ionic character?  
a) H - F                      b) H - I                      c) H - Br                      d) H - Cl
- 2) Generally, how many valence electrons are needed for atoms to be *most* stable?  
a) 8                              b) 6                              c) 32                              d) 18
- 3) Which type of bonding is characteristic of a substance that has a high melting point and electrical conductivity only in the liquid phase?  
a) ionic                      b) metallic                      c) nonpolar covalent                      d) polar covalent
- 4) Which compound is ionic?  
a)  $\text{CaCl}_2$                       b)  $\text{N}_2\text{O}$                       c) HCl                      d)  $\text{SO}_2$
- 5) In which compound do the atoms have the greatest difference in electronegativity?  
a)  $\text{AlCl}_3$                       b) NaBr                      c) KF                      d) LiI
- 6) What type of bonds are present in a strip of magnesium ribbon?  
a) metallic                      b) covalent                      c) ionic                      d) London dispersion
- 7) Which particles are gained, lost, or shared by an atom when it forms a chemical bond?  
a) nucleons                      b) neutrons                      c) protons                      d) electrons
- 8) Two atoms with an electronegativity difference of 0.4 form a bond that is  
a) ionic, because electrons are transferred  
b) covalent, because electrons are shared  
c) ionic, because electrons are shared  
d) covalent, because electrons are transferred
- 9) Which type of bonds are formed when calcium atoms react with oxygen atoms?  
a) hydrogen                      b) coordinate covalent                      c) polar covalent                      d) ionic
- 10) Which type of bond is formed by the transfer of electrons from one atom to another?  
a) an ionic bond                      c) a covalent bond  
b) a hydrogen bond                      d) a coordinate covalent bond
- 11) Which atoms are most likely to form covalent bonds?  
a) nonmetal atoms that share electrons  
b) metal atoms that share protons  
c) nonmetal atoms that share protons  
d) metal atoms that share electrons

12) Which compound contains *both* covalent and ionic bonds?



13) Oxygen, nitrogen, and fluorine bond with hydrogen to form molecules. These molecules are attracted to each other by

a) coordinate covalent bonds

c) ionic bonds

b) electrovalent bonds

d) hydrogen bonds

14) The bond between hydrogen and oxygen in a water molecule is classified as

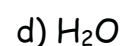
a) covalent and nonpolar

c) ionic and polar

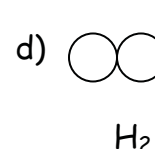
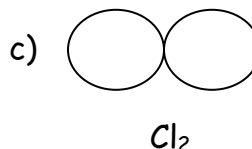
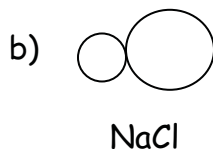
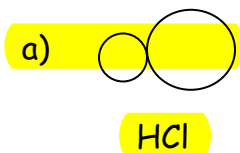
b) ionic and nonpolar

d) covalent and polar



15) Which is a nonpolar molecule containing a nonpolar covalent bond?



16) Which diagram *best* represents a polar covalent molecule?



17) Which molecule is nonpolar due to a symmetrical distribution of charge?



18) The unusually high boiling point of water is due to the

a) network bonds between the molecules

b) nonpolar character of the molecules

c) hydrogen bonds between the molecules

d) linear structure of the molecules


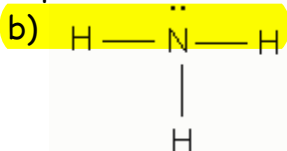
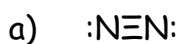
19) Which substance will conduct electricity in *both* the solid phase and the liquid phase?



20) Which formula represents a molecular substance?



21) Which molecule contains a polar covalent bond?



22) The electrons in a bond between two iodine atoms ( $I_2$ ) are shared

- a) unequally, and the resulting bond is polar
- b) equally, and the resulting bond is polar
- c) unequally, and the resulting bond is nonpolar
- d) equally, and the resulting bond is nonpolar

23) Which of the following solid substances contains positive ions immersed in a sea of mobile electrons?

a)  $O_2$

b)  $Cu$

c)  $CuO$

d)  $SiO_2$

### Short Answer Questions:

24) In the boxes below, draw a correct Lewis electron-dot structure for: (3 pts.)


- (1) an atom of hydrogen
- (2) an atom of oxygen
- (3) a molecule of water ( $H_2O$ )



(1) hydrogen

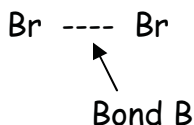
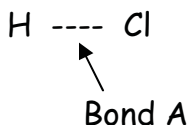



(2) oxygen




(3) water

25)




a) State *one* way in which bond A and bond B (above) are the same and *one* way in which they are different. (2 pts.) 

b) Draw the Lewis electron-dot diagrams for the two molecules above. Label any partial charges. (2 pts.)



HCl



$Br_2$

c) Is HCl a polar or nonpolar molecule? [Explain why.] (2 pts.)



26) Write the correct IUPAC chemical formula for the following compounds (1 pt. each)

1) barium chloride 

2) iron (III) bromide 

3) dihydrogen monoxide 

4) magnesium nitrate 

5) sodium bromide 

27) Write the correct IUPAC chemical names for the following compounds (1 pt. each)

1)  $\text{CF}_4$  

2)  $\text{N}_2\text{S}_3$  

3)  $\text{MgO}$  

4)  $\text{NaOH}$  

28) Metals like copper are often used in electrical wiring.

a) Name *two* properties of metals that makes them useful in electrical wiring (2 pts.)



b) Explain how metallic bonding between copper atoms can account for each of these properties (1 pt.)



29) Describe the role of valence electrons in: (1 pt. each)

1) an ionic bond 

2) a covalent bond 

3) a metallic bond 

30) In the laboratory, a student compares the properties of two unknown solids. The results of his experiment are reported in the data table below.

	Substance A	Substance B
Melting Point	low	high
Solubility in Water	nearly insoluble	soluble
Hardness	soft, waxy crystals	hard crystals
Electrical Conductivity	poor conductor in both solid and aqueous states	poor conductor in the solid state, but good conductor in the aqueous state

Predict the type of bonding in substance A. (1 pt.)

31) Given the binary compound formed from magnesium and chlorine:

- Write the correct IUPAC name for this compound (1 pt.)
- Write the correct chemical formula for this compound (1 pt.)
- What type of bond forms between magnesium and chlorine? [*Give one reason to support your answer.*] (2 pts.)
- In the boxes below, draw the Lewis electron-dot structures for the elements Mg and Cl. (2 pts.)




magnesium



chlorine

- In the box below, draw the Lewis electron-dot structure for the compound formed from magnesium and chlorine. [*Include any charges or partial charges.*] (1 pt.)



32) Explain, in terms of electronegativity, why an H-F bond is expected to be more polar than an H-I bond. (2 pts.)

33) Given the reaction:  $\text{H}_2 + \text{Cl}_2 \rightarrow 2\text{HCl}$


Which statement best describes the energy change as bonds are formed and broken in this reaction?

- a) The forming of the H-Cl bond releases energy
- b) The forming of the H-Cl bond absorbs energy
- c) The breaking of the H-H bond releases energy
- d) The breaking of the Cl-Cl bond releases energy

34) When phosphorus and chlorine atoms combine to form a molecule of  $\text{PCl}_3$ , 6 electrons will be

- a) shared equally      b) shared unequally      c) lost      d) gained

35) In the box below, draw a Lewis electron-dot structure for a molecule of hydrogen.




Hydrogen

1. \_\_\_\_\_
2. \_\_\_\_\_
3. \_\_\_\_\_
4. \_\_\_\_\_
5. \_\_\_\_\_
6. \_\_\_\_\_
7. \_\_\_\_\_
8. \_\_\_\_\_
9. \_\_\_\_\_
10. \_\_\_\_\_
11. \_\_\_\_\_
12. \_\_\_\_\_
13. \_\_\_\_\_
14. \_\_\_\_\_
15. \_\_\_\_\_
16. \_\_\_\_\_
17. \_\_\_\_\_
18. \_\_\_\_\_
19. \_\_\_\_\_
20. \_\_\_\_\_
21. \_\_\_\_\_
22. \_\_\_\_\_
23. \_\_\_\_\_

24) In the boxes below, draw a correct Lewis electron-dot structure for: (3 pts.)

- (1) an atom of hydrogen
- (2) an atom of oxygen
- (3) a molecule of water ( $\text{H}_2\text{O}$ )



(1) hydrogen



(2) oxygen



(3) water

25)



Bond A




Bond B

a) State *one* way in which bond A and bond B (above) are the same and *one* way in which they are different. (2 pts.)


\_\_\_\_\_

\_\_\_\_\_

b) Draw the Lewis electron-dot diagrams for the two molecules above. Label any partial charges. (2 pts.)



HCl



$\text{Br}_2$

c) Is HCl a polar or nonpolar molecule? [Explain why.] (2 pts.)

\_\_\_\_\_

\_\_\_\_\_

26) Write the correct IUPAC chemical formula for the following compounds (1 pt. each)

- 1) barium chloride \_\_\_\_\_
- 2) iron (III) bromide \_\_\_\_\_
- 3) dihydrogen monoxide \_\_\_\_\_
- 4) magnesium nitrate \_\_\_\_\_
- 5) sodium bromide \_\_\_\_\_

27) Write the correct IUPAC chemical names for the following compounds (1 pt. each)

1)  $\text{CF}_4$  \_\_\_\_\_

2)  $\text{N}_2\text{S}_3$  \_\_\_\_\_

3)  $\text{MgO}$  \_\_\_\_\_

4)  $\text{NaOH}$  \_\_\_\_\_

28) Metals like copper are often used in electrical wiring.

a) Name *two* properties of metals that makes them useful in electrical wiring (2 pts.)

b) Explain how metallic bonding between copper atoms can account for each of these properties (1 pt.)

29) Describe the role of valence electrons in: (1 pt. each)

1) an ionic bond

\_\_\_\_\_

2) a covalent bond

\_\_\_\_\_

3) a metallic bond

\_\_\_\_\_

30) In the laboratory, a student compares the properties of two unknown solids. The results of his experiment are reported in the data table below.

	Substance A	Substance B
Melting Point	low	high
Solubility in Water	nearly insoluble	soluble
Hardness	soft, waxy crystals	hard crystals
Electrical Conductivity	poor conductor in both solid and aqueous states	poor conductor in the solid state, but good conductor in the aqueous state

Predict the type of bonding in substance A. (1 pt.)

\_\_\_\_\_



31) Given the binary compound formed from magnesium and chlorine:

- a) Write the correct IUPAC name for this compound (1 pt.)
- b) Write the correct chemical formula for this compound (1 pt.)
- c) What type of bond forms between magnesium and chlorine? [*Give one reason to support your answer.*] (2 pts.)
- d) In the boxes below, draw the Lewis electron-dot structures for the elements Mg and Cl. (2 pts.)



magnesium



chlorine

- e) In the box below, draw the Lewis electron-dot structure for the compound formed from magnesium and chlorine. [*Include any charges or partial charges.*] (1 pt.)



32) Explain, in terms of electronegativity, why an H-F bond is expected to be more polar than an H-I bond. (2 pts.)

33) Given the reaction:  $\text{H}_2 + \text{Cl}_2 \rightarrow 2\text{HCl}$

Which statement best describes the energy change as bonds are formed and broken in this reaction?

- a) The forming of the H-Cl bond releases energy
- b) The forming of the H-Cl bond absorbs energy
- c) The breaking of the H-H bond releases energy
- d) The breaking of the Cl-Cl bond releases energy

34) When phosphorus and chlorine atoms combine to form a molecule of  $\text{PCl}_3$ , 6 electrons will be

- a) shared equally      b) shared unequally      c) lost      d) gained

35) In the box below, draw a Lewis electron-dot structure for a molecule of hydrogen.



Hydrogen